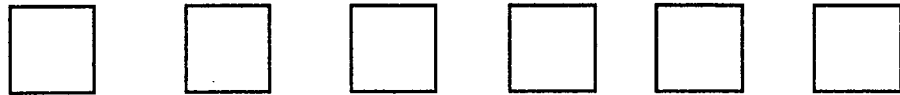



★★ 2. Color in every other square:



★★ 3. How many
cats are there?





★★★ 4. If you gave a friend 2
cookies, and he ate 1
cookie, how many
cookies would he have
left?



- ★★★★ 5. How many sides does this square have? _____
How many sides does this triangle have? _____
How many sides does this rectangle have? _____



- ★★★★ 6. How many noses are there? _____
How many ears are there? _____
How many legs are there? _____



(Parents: Reading the problem to your child is ALWAYS okay. If you help them solve the problems, please initial the problem and they will receive partial credit.)