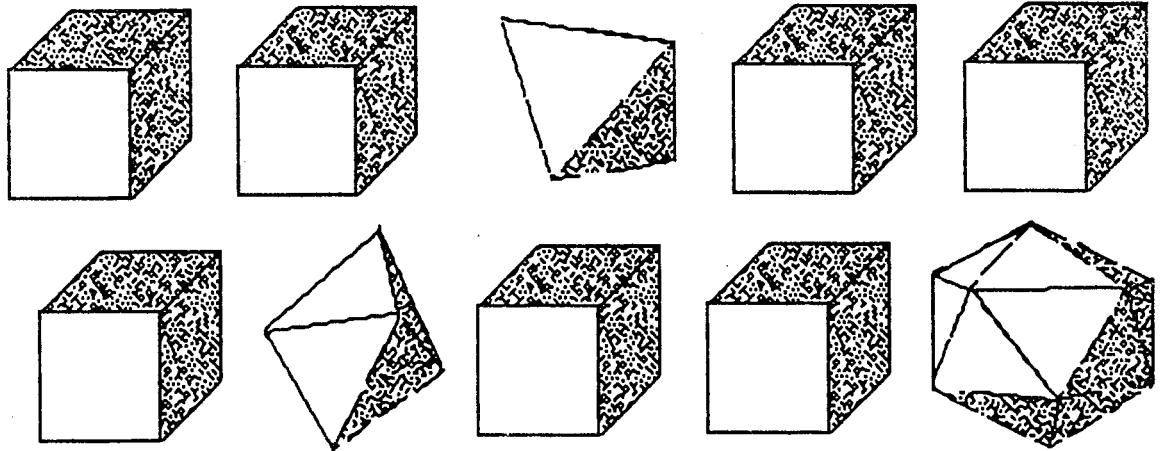


★★ 2. Fill in the numbers between 10 and 20.

10 _____ _____ _____ _____
 _____ _____ _____ _____ _____ 20


★ 3. How many cubes are there? _____



★★ 4. How much is: $\begin{array}{r} 100 \\ +100 \\ \hline \end{array}$

★★★ 5. Draw a house using:

1 big square



1 rectangle




1 triangle



2 small squares



★★★★ 6. Use pennies to measure this rectangle.



How many pennies wide (↓) is it? _____

How many pennies long (→) is it? _____

(Parents: Reading the problem to your child is ALWAYS okay. If you help them solve the problems, please initial the problem and they will receive partial credit.)